

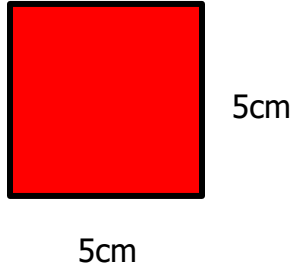
2021 WORKSHEET 10

MATHEMATICS YEAR 8

Answer all the questions in the Mathematics Activity book.

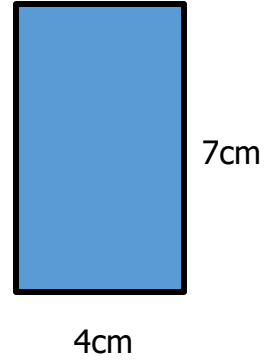
Find the area of the following shapes. Show all necessary working.

a.



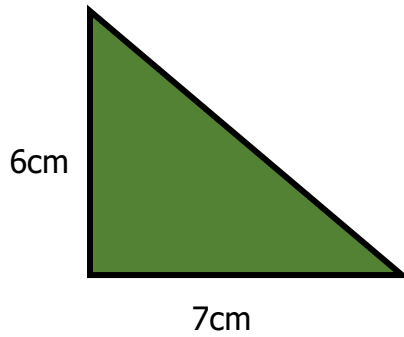
(2 marks)

b.



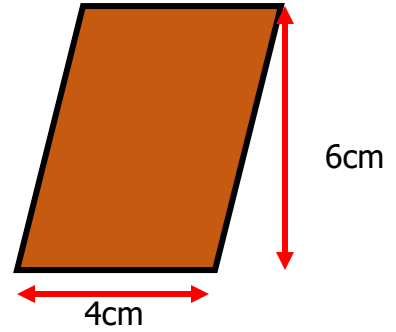
(2 marks)

c.



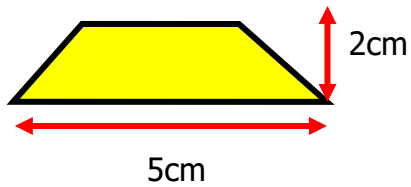
(2 marks)

d.



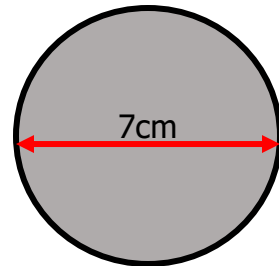
(2 marks)

e.



(2 marks)

f.



$$\pi = \frac{22}{7}$$

(2 marks)